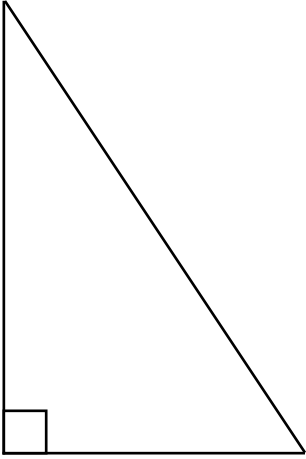


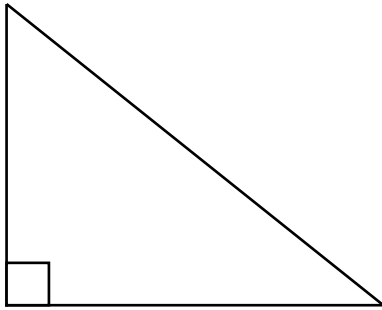
# Calculating the Area of Triangles

Measure the shorter sides to the nearest centimetre and calculate the area of each of these right-angled triangles.

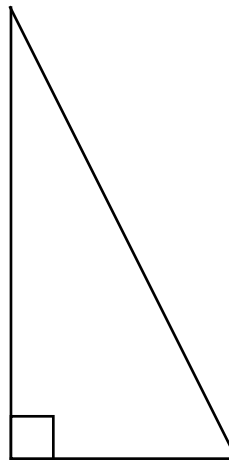
1. \_\_\_\_\_ cm<sup>2</sup>



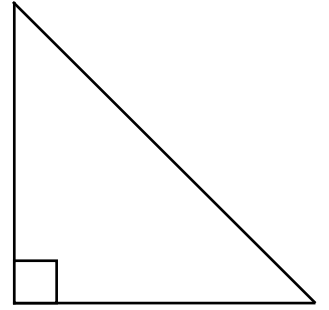
2. \_\_\_\_\_ cm<sup>2</sup>



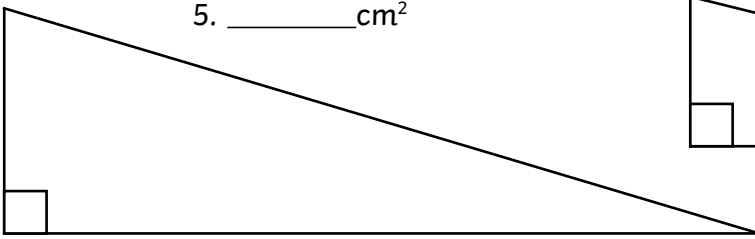
3. \_\_\_\_\_ cm<sup>2</sup>



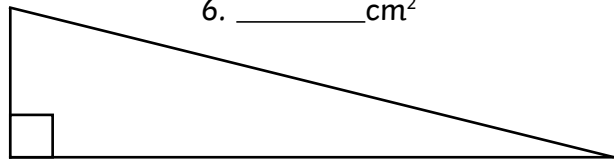
4. \_\_\_\_\_ cm<sup>2</sup>



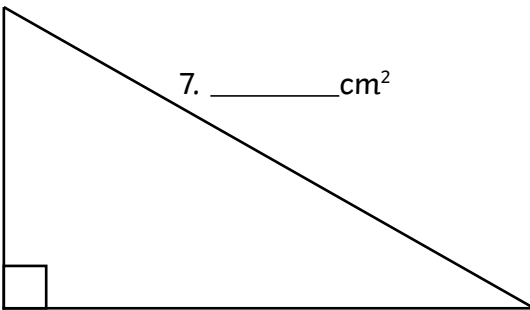
5. \_\_\_\_\_ cm<sup>2</sup>



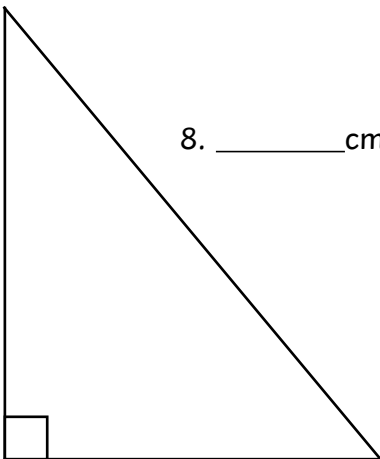
6. \_\_\_\_\_ cm<sup>2</sup>



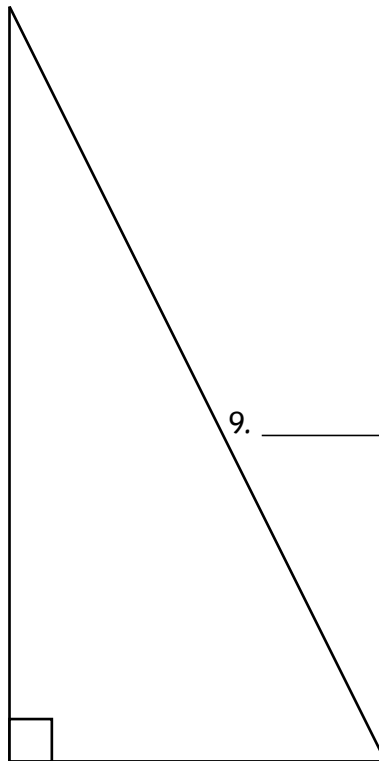
7. \_\_\_\_\_ cm<sup>2</sup>



8. \_\_\_\_\_ cm<sup>2</sup>



9. \_\_\_\_\_ cm<sup>2</sup>



10. \_\_\_\_\_ cm<sup>2</sup>



# Calculating the Area of Triangles

## Answers

Question Number	Area
1	12cm <sup>2</sup>
2	10cm <sup>2</sup>
3	9cm <sup>2</sup>
4	8cm <sup>2</sup>
5	15cm <sup>2</sup>
6	8cm <sup>2</sup>
7	14cm <sup>2</sup>
8	15cm <sup>2</sup>
9	25cm <sup>2</sup>
10	6cm <sup>2</sup>

# Calculating the Area of Triangles

Measure the base and height of each triangle to the nearest centimetre.  
Calculate the area of each of these triangles.

1. \_\_\_\_\_ cm<sup>2</sup>

2. \_\_\_\_\_ cm<sup>2</sup>

3. \_\_\_\_\_ cm<sup>2</sup>

4. \_\_\_\_\_ cm<sup>2</sup>

5. \_\_\_\_\_ cm<sup>2</sup>

6. \_\_\_\_\_ cm<sup>2</sup>

7. \_\_\_\_\_ cm<sup>2</sup>

8. \_\_\_\_\_ cm<sup>2</sup>

9. \_\_\_\_\_ cm<sup>2</sup>

10. \_\_\_\_\_ cm<sup>2</sup>

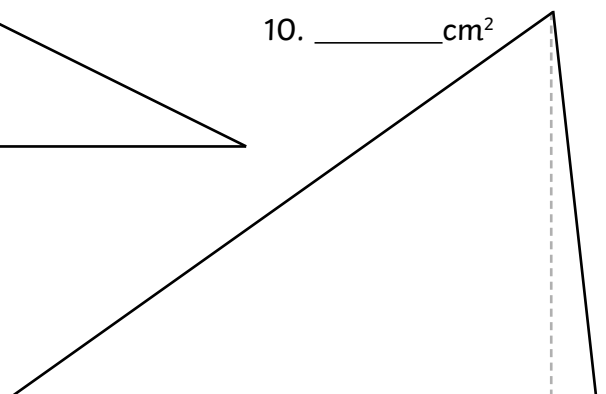
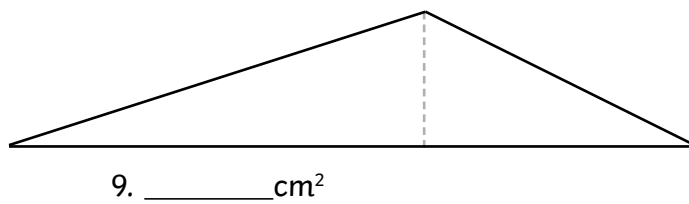
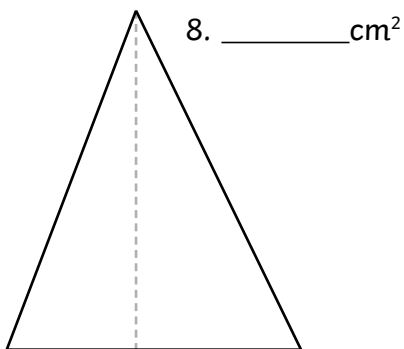
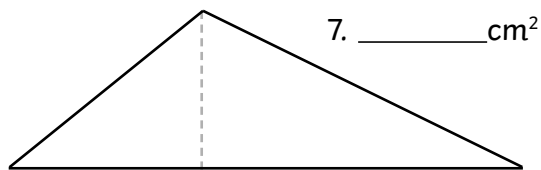
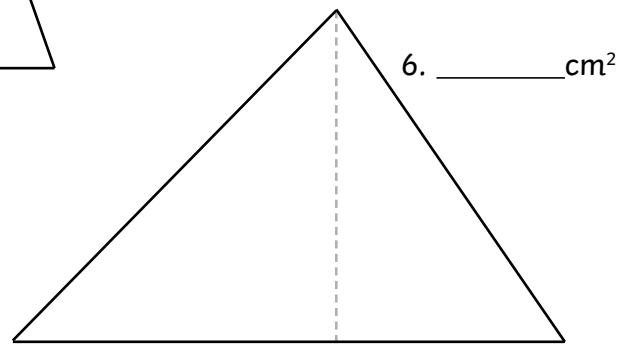
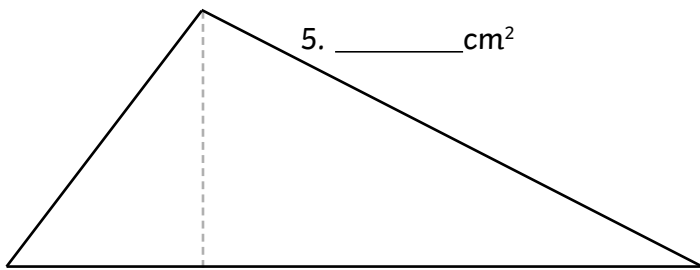
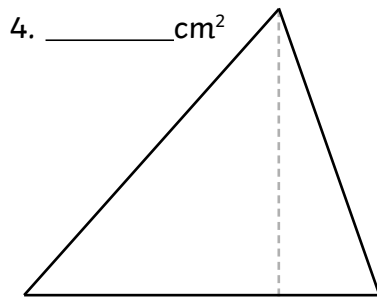
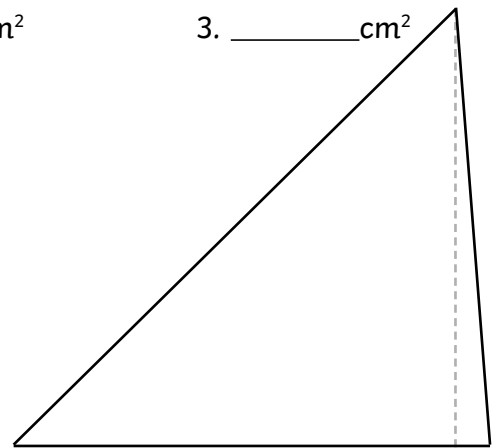
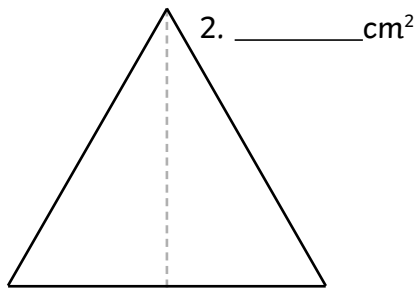
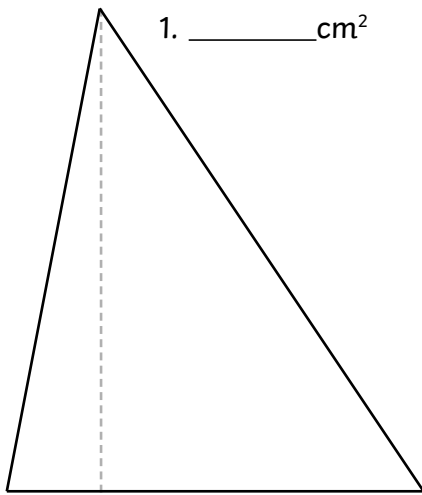
# Calculating the Area of Triangles

## Answers

Question Number	Area
1	20cm <sup>2</sup>
2	12cm <sup>2</sup>
3	31.5cm <sup>2</sup>
4	40.5cm <sup>2</sup>
5	18cm <sup>2</sup>
6	14cm <sup>2</sup>
7	18cm <sup>2</sup>
8	33cm <sup>2</sup>
9	6cm <sup>2</sup>
10	17.5cm <sup>2</sup>

# Calculating the Area of Triangles

Measure each side to the nearest tenth of a centimetre and calculate the area of each of these triangles.



# Calculating the Area of Triangles

## Answers

Question Number	Area
1	17.6cm <sup>2</sup>
2	7.77cm <sup>2</sup>
3	18.27cm <sup>2</sup>
4	8.93cm <sup>2</sup>
5	15.64cm <sup>2</sup>
6	16.06cm <sup>2</sup>
7	7.14cm <sup>2</sup>
8	8.775cm <sup>2</sup>
9	8.19cm <sup>2</sup>
10	19.635cm <sup>2</sup>